

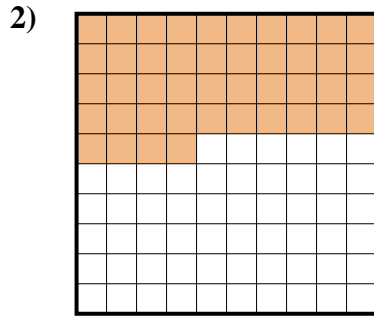


Determine which letter best represents the amount shaded of the whole.

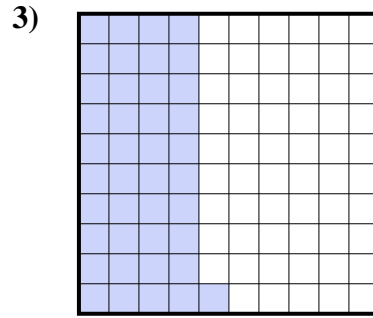
Answers



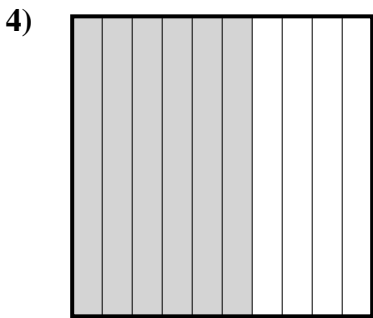
- A. 0.2
- B. 0.02
- C. 200.0
- D. 2



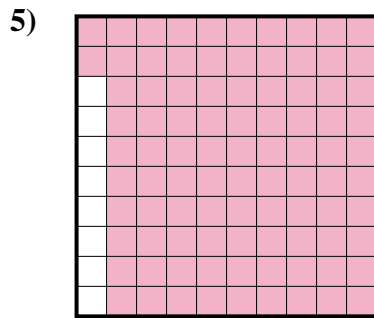
- A. 44
- B. 4.4
- C. 440.0
- D. 0.44



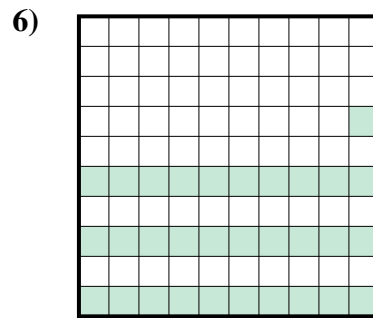
- A. 4.1
- B. 41
- C. 0.41
- D. 0.041



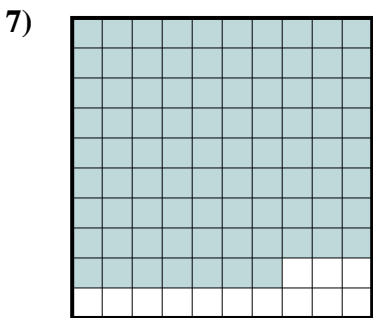
- A. 0.06
- B. 60
- C. 0.6
- D. 600.00




- A. 9.2
- B. 0.92
- C. 920.0
- D. 0.092



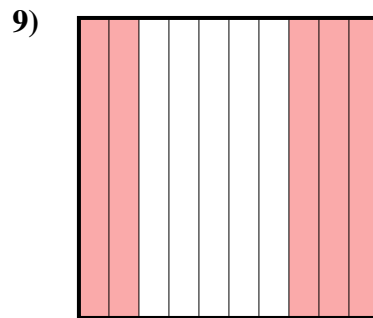
- A. 31
- B. 310.0
- C. 0.31
- D. 0.031



- A. 870.0
- B. 8.7
- C. 0.87
- D. 870.00



- A. 100.00
- B. 0.01
- C. 0.1
- D. 1

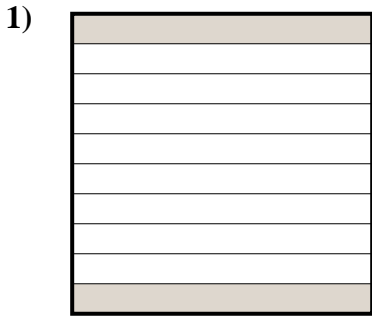


- A. 0.05
- B. 50
- C. 0.5
- D. 5

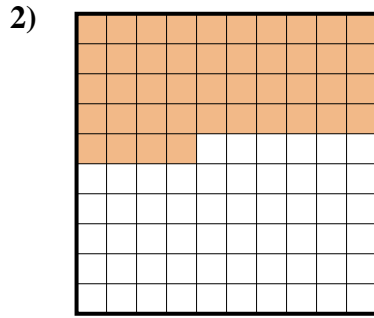
1. _____
2. _____
3. _____
4. _____
5. _____
6. _____
7. _____
8. _____
9. _____



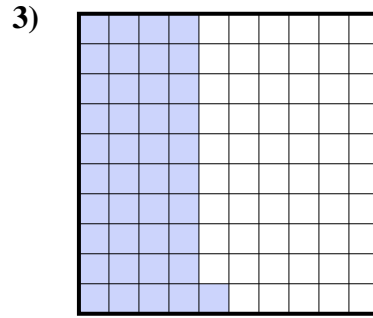
Determine which letter best represents the amount shaded of the whole.



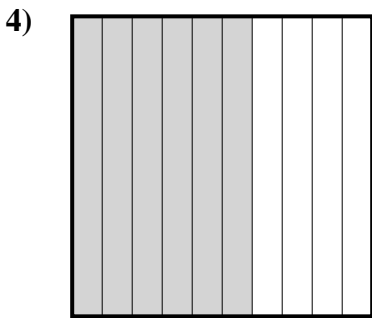
- A. 0.2
- B. 0.02
- C. 200.0
- D. 2



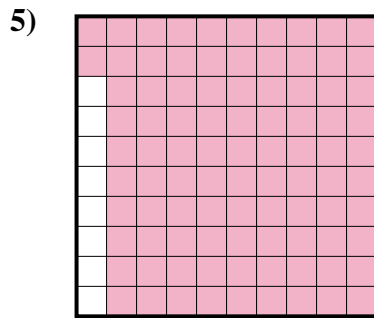
- A. 44
- B. 4.4
- C. 440.0
- D. 0.44



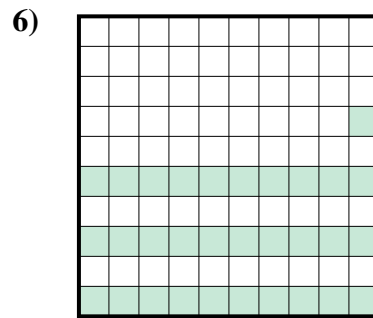
- A. 4.1
- B. 41
- C. 0.41
- D. 0.041



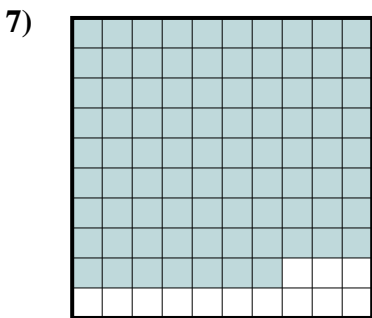
- A. 0.06
- B. 60
- C. 0.6
- D. 600.00




- A. 9.2
- B. 0.92
- C. 920.0
- D. 0.092



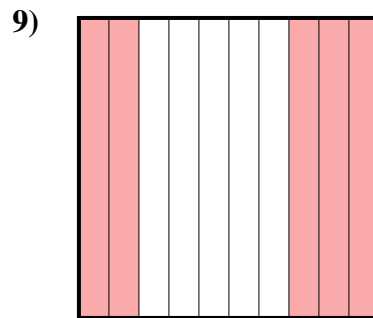
- A. 31
- B. 310.0
- C. 0.31
- D. 0.031



- A. 870.0
- B. 8.7
- C. 0.87
- D. 870.00



- A. 100.00
- B. 0.01
- C. 0.1
- D. 1



- A. 0.05
- B. 50
- C. 0.5
- D. 5

Answers

- 1. **A**
- 2. **D**
- 3. **C**
- 4. **C**
- 5. **B**
- 6. **C**
- 7. **C**
- 8. **C**
- 9. **C**